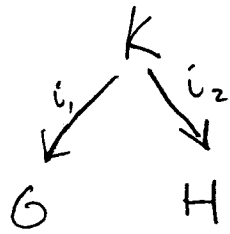
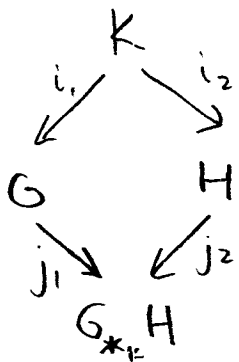


Last time we showed that given any diagram in Grp like



we get a pushout



where $G *_K H = G * H / N$ and N is the normal subgroup generated by $(i_1(k) * 1)(1 * i_2(k))^{-1}$ for all $k \in K$. Using this, we see

Seifert-van Kampen Theorem: If (X, x_0) is a pointed space, U and V are open sets in X , $U \cap V$ is path-connected, $x_0 \in U \cap V$, and $U \cup V = X$ then

$$\pi_1(X, x_0) = \pi_1(U, x_0) * \pi_1(V, x_0) / N$$

where N is the normal subgroup of $\pi_1(X, x_0)$ generated by

$$\left(\pi_1(i_1(k)) * I \right) \left(1 * \pi_1(i_2(k)) \right)^{-1} \quad \forall k \in \pi_1(U \cap V, x_0)$$

where $i_1: (U \cap V, x_0) \hookrightarrow (U, x_0)$
 $i_2: (U \cap V, x_0) \hookrightarrow (V, x_0)$

Proof: use previous S-vK theorem + our description of the pushout of groups.

□

Example 1: $\pi_1(T^2, *) \cong \mathbb{Z}^2$

We've seen this using the covering map $\mathbb{R}^2 \rightarrow T^2$.

Also,

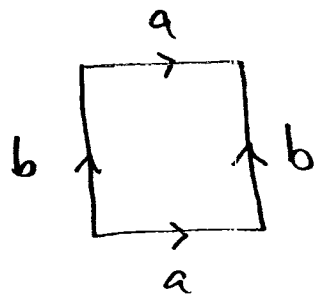
$$\pi_1(X \times Y, (x_0, y_0)) \cong \pi_1(X, x_0) \times \pi_1(Y, y_0)$$

(see the book), so

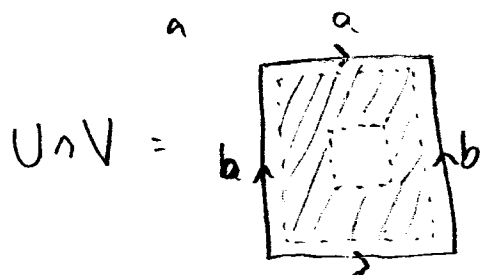
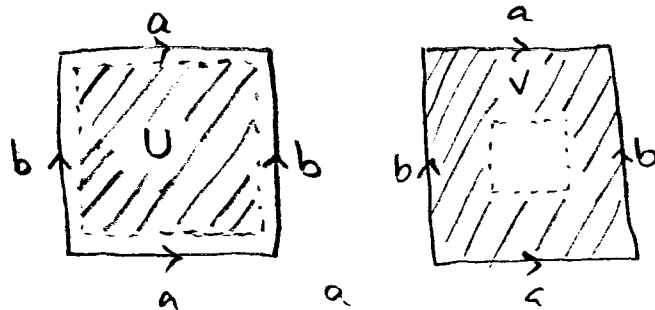
$$\pi_1(T^2, *) \cong \pi_1(S^1, *) \times \pi_1(S^1, *) \cong \mathbb{Z}^2$$

But let's compute it using S-vK.

Note that T^2 is a quotient space of $I \times I$:



where we identify the edges as marked. Let $U, V \subseteq T^2$ be



We get a pushout, by S-vK

$$\begin{array}{ccc}
 & \pi_1(U \cup V, x_0) \cong \mathbb{Z} & \\
 \pi_1(i_1) \swarrow & & \searrow \pi_1(i_2) \\
 1 = \pi_1(U, x_0) & & \pi_1(V, x_0) \cong \mathbb{Z} * \mathbb{Z} \\
 & \searrow & \swarrow \\
 & \pi_1(T^2, x_0) &
 \end{array}$$

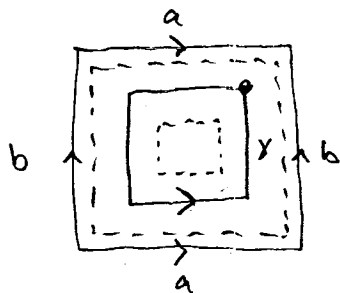
Since

1) $U \cup V$ has S^1 as a deformation retract

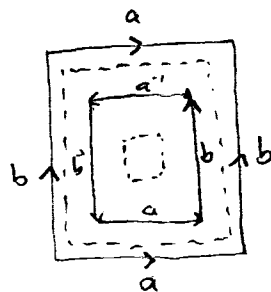
2) U is contractible

3) $V \cong \text{disk with hole} \cong \text{disk with hole} \cong \text{annulus} \cong \text{two circles}$

To describe $\pi_1(i_2): \mathbb{Z} \rightarrow \mathbb{Z} * \mathbb{Z}$, we just need to compute $\pi_1(i_2(1))$, since 1 generates \mathbb{Z} . Letting $[\gamma]$ be the generator of $\pi_1(U \cup V, x_0)$



we find that $\pi_1(i_2)([\gamma]) = a^{-1}b^{-1}ab$



So using the formula for a pushout of groups,

$$\pi_1(X, x_0) = 1 * (\mathbb{Z} * \mathbb{Z}) / N$$

where N is as in the S-vK theorem. Note that

$$1 * G \cong G$$

(check it!) so $\pi_1(X, x_0)$ is the free group on $\{a, b\}$ mod the normal subgroup generated by

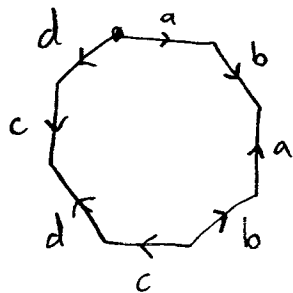
$$\{1, a^{-1}b^{-1}ab\}.$$

left side
of pushout

right side

But this is just the free abelian group on $\{a, b\}$,
i.e. $\mathbb{Z} \times \mathbb{Z} = \mathbb{Z}^2$.

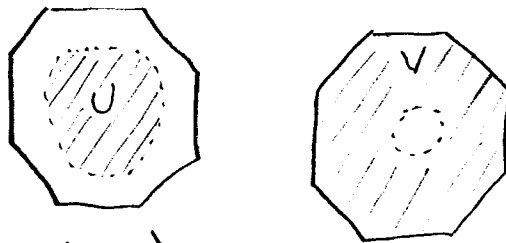
Homework 2: Show with a picture proof that the quotient of a solid octagon formed by identifying edges as below



is homeomorphic to the two-holed torus



and then use S-VK to compute π_1 of the space. (Hint: use



as your open sets.)

Homework #3. Let X be the quotient space of a solid triangle formed as shown and compute $\pi_1(X, *)$.

