

ANGLE BISECTION WITH STRAIGHTEDGE AND COMPASS

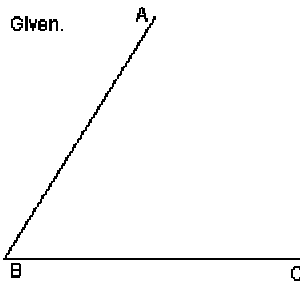
The discussion below is largely based upon material and drawings from the following site:

<http://strader.cehd.tamu.edu/geometry/bisectangle1.0/bisectangle.html>

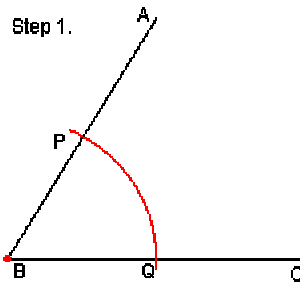
Angle Bisection Problem: To construct the angle bisector of an angle using an unmarked straightedge and collapsible compass.

Given an angle to bisect; for example, take $\angle ABC$.

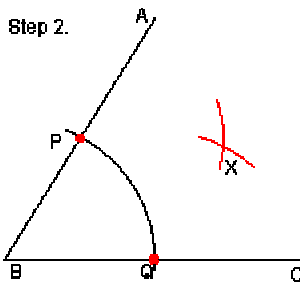
To construct a point X in the interior of the angle such that the ray $[BX$ bisects the angle. In other words, $|\angle ABX| = |\angle XBC|$.



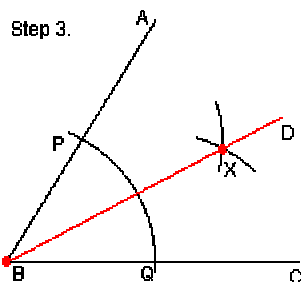
Step 1. Draw a circle that is centered at the vertex B of the angle. This circle can have a radius of any length, and it must intersect both sides of the angle. We shall call these intersection points P and Q . This provides a point on each line that is an equal distance from the vertex of the angle.



Step 2. Draw two more circles. The first will be centered at P and will pass through Q , while the other will be centered at Q and pass through P . A basic continuity result in geometry implies that the two circles meet in a pair of points, one on each side of the line PQ (see the footnote at the end of this document). Take X to be the intersection point which is not on the same side of PQ as B . Equivalently, choose X so that X and B lie on opposite sides of PQ .



Step 3. Draw a line through the vertex **B** and the constructed point **X**. We claim that the ray **[BX]** will be the angle bisector.

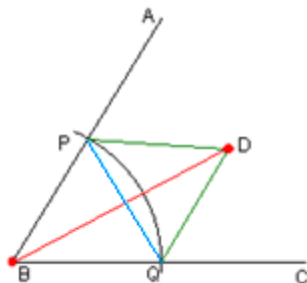


Proof that this construction yields the angle bisector.

We need to prove that **X** lies in the interior of $\angle ABC$ and that $|\angle ABX| = |\angle DBC|$. If we know these then we also have

$$|\angle ABC| = |\angle ABX| + |\angle XBC| = 2|\angle ABX| = 2|\angle XBC|.$$

In most discussions of this construction the first statement is ignored, but we shall verify this fact because it is needed to prove the sum formula. By construction we know that $|BP| = |BQ|$ and also $|PX| = |PQ| = |QX|$.



The equations $|BP| = |BQ|$ and $|PD| = |QD|$ imply that the line **BD** is the perpendicular bisector of the segment **[PQ]**, so **BD** meets **PQ** at some point **X** between **P** and **Q**. By construction the points **D** and **B** lie on opposite sides of **PQ**, and this implies that the common point of the lines **BD** and **PQ** must lie between **B** and **D**. Thus we have the betweenness relationships **P*X*Q** and **B*X*D**, and these imply that **D must lie in the interior of $\angle ABC$** (because the first betweenness relationship implies that **P** and **X** lie on the same side of the line **BC** and also that **Q** and **X** lie on the same side of the line **BA**, while the second betweenness relationship implies that **X** and **D** lie on the same sides of the lines **BA** and **BC**, and these combine to show that **X** and **D** lie in the angle interior by the definition of the latter).

The proof that $|\angle ABD| = |\angle DBC|$ is now just the standard argument in elementary geometry textbooks. The equalities $|BP| = |BQ|$ and $|PD| = |QD|$ and the identity $|BD| = |BD|$ imply that $\triangle ABD \cong \triangle DBC$, and this implies that $|\angle ABD| = |\angle DBC|$.

FOOTNOTE. The basic continuity result is Theorem 3 on page 134 (= document page 19) of the file <http://math.ucr.edu/~res/math133/geometrnotes3b.pdf>. It applies to the situation in Step 2, for the line **PQ** meets the circle centered at **Q** in two points, one of which is **P** and the other of which we shall call **Y**, and the points **P** and **Y** are respectively inside and outside the circle with center **P**. Therefore the theorem in question implies that the two circles meet in two points, one on each side of the line **PQ**.